

$$\square + \square = \square$$

$$12 + 3 = \square$$

$$\square - \square = \square$$

$$18 - 4 = \square$$

$$\square - \square = \square$$

$$19 - 3 = \square$$

$$\square + \square = \square$$

$$11 + 4 = \square$$

$$\square - \square = \square$$

$$17 - 5 = \square$$

$$\square + \square = \square$$

$$12 + 7 = \square$$

$$\square + \square = \square$$

$$14 + 4 = \square$$

$$\square - \square = \square$$

$$18 - 2 = \square$$



$$18 - 3 = \square$$

$$14 + 2 = \square$$

$$17 - 6 = \square$$

$$11 + 4 = \square$$

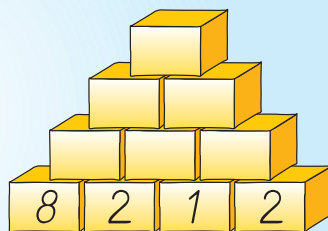
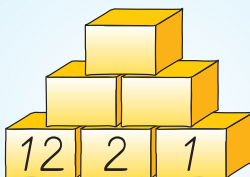
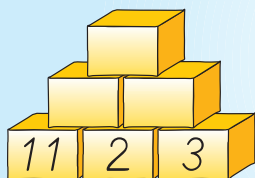
+ 3	
12	
15	
13	
16	

$$14 + 5 = \square$$

$$19 - 6 = \square$$

$$13 + 4 = \square$$

$$17 - 3 = \square$$

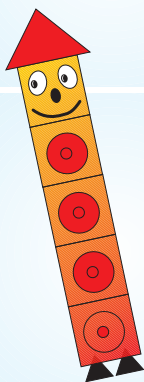


$$16 \bigcirc \square = 12$$

$$14 \bigcirc \square = 19$$

$$19 \bigcirc \square = 17$$

$$11 \bigcirc \square = 18$$



$$15 \bigcirc \square = 11$$

$$15 \bigcirc \square = 17$$

$$15 \bigcirc \square = 19$$

$$15 \bigcirc \square = 14$$